



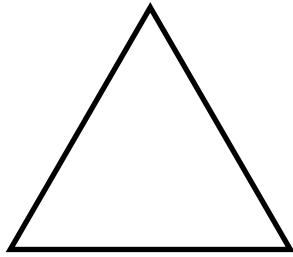
# Classifying triangles

## Grade 4 Geometry Worksheet

On each triangle, mark all equal sides or equal angles.

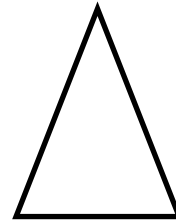
Then, classify each triangle as **equilateral**, **isosceles**, **scalene** or **right**.

1)



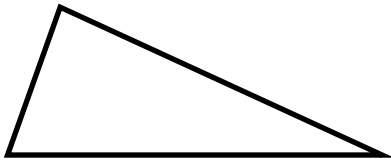
\_\_\_\_\_

2)



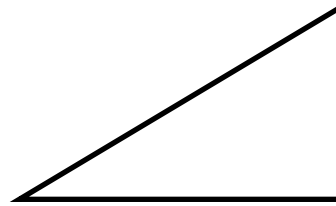
\_\_\_\_\_

3)



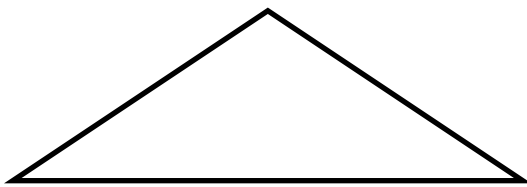
\_\_\_\_\_

4)




\_\_\_\_\_

5)



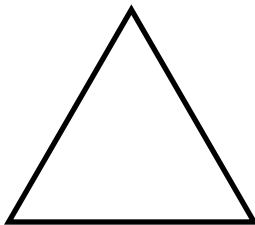
\_\_\_\_\_

6)



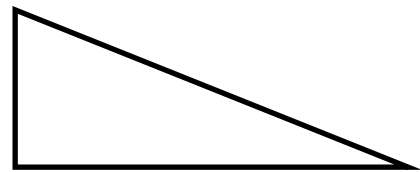
\_\_\_\_\_

7)



\_\_\_\_\_

8)

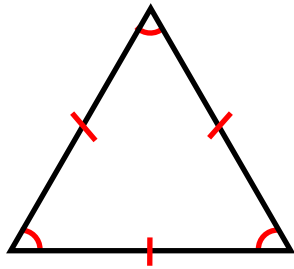


\_\_\_\_\_



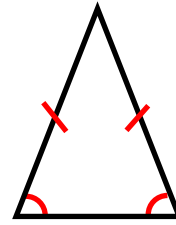
# Answers

1)



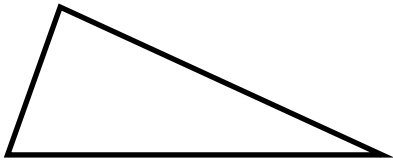
Equilateral triangle

2)



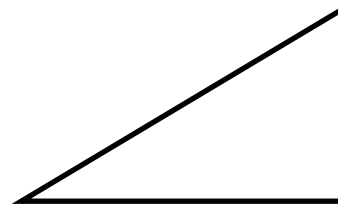
Isosceles triangle

3)



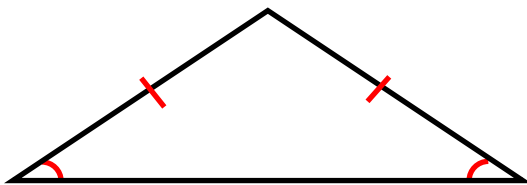
Scalene triangle

4)




Right triangle

5)



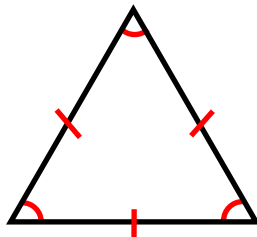
Isosceles triangle

6)



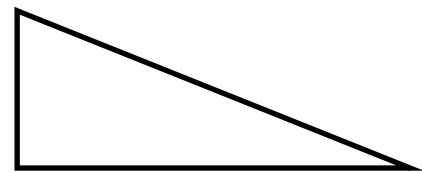
Scalene triangle

7)



Equilateral triangle

8)



Right triangle