

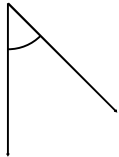


Classifying angles

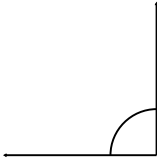
Grade 5 Geometry Worksheet

Classify the angles as acute, right, obtuse or reflex.

1)



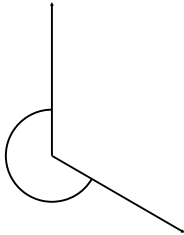
2)



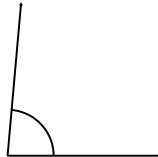
3)



4)



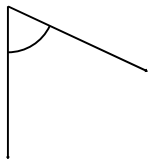
5)



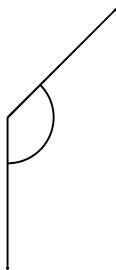
6)



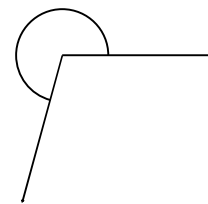
7)



8)



9)



Draw and label one acute, one obtuse, one right and one reflex angle.

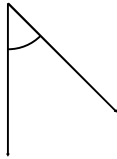


Classifying angles

Grade 5 Geometry Worksheet

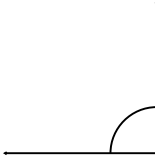
Classify the angles as acute, right, obtuse or reflex.

1)



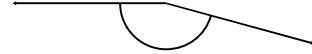
Acute

2)



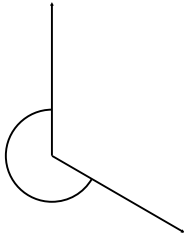
Right

3)



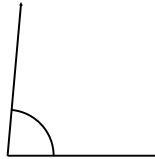
Obtuse

4)



Reflex

5)



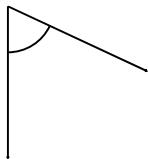
Acute

6)



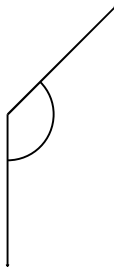
Obtuse

7)



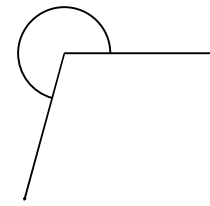
Acute

8)



Obtuse

9)



Reflex

Draw and label one acute, one obtuse, one right and one reflex angle.