



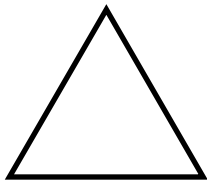
# Classifying triangles

## Grade 5 Geometry Worksheet

On each triangle, mark all equal sides or equal angles.

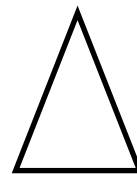
Then, classify each triangle as **equilateral**, **isosceles**, **scalene** or **right**.

1)



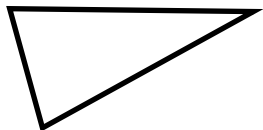
\_\_\_\_\_

2)



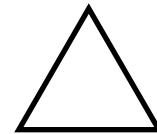
\_\_\_\_\_

3)



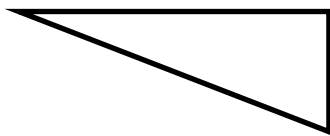
\_\_\_\_\_

4)



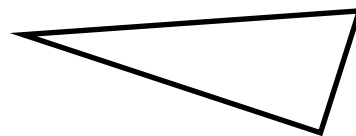
\_\_\_\_\_

5)



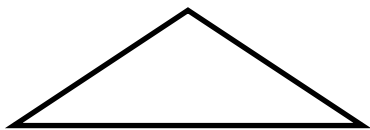
\_\_\_\_\_

6)



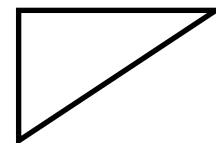
\_\_\_\_\_

7)



\_\_\_\_\_

8)

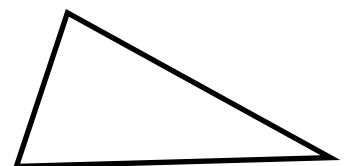


\_\_\_\_\_

Measure each angle of the triangle and label the triangle.

What type of triangle is it? Explain.

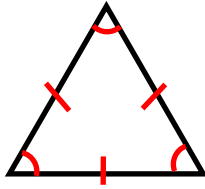
\_\_\_\_\_  
\_\_\_\_\_





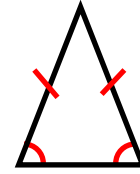
# Answers

1)



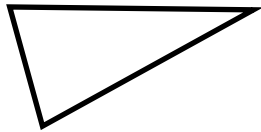
Equilateral triangle

2)



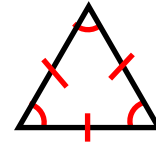
Isosceles triangle

3)



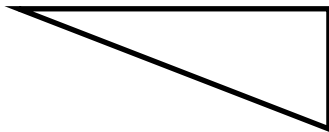
Scalene triangle

4)



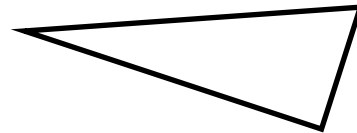
Equilateral triangle

5)



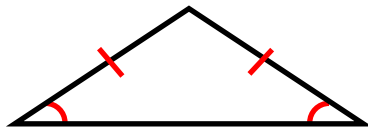
Right triangle

6)



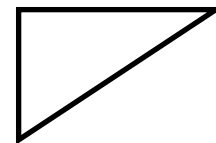
Scalene triangle

7)



Isosceles triangle

8)



Right triangle

Measure each angle of the triangle and label the triangle. What type of triangle is it? Explain.

It is a scalene triangle because all three sides have different lengths, and all three angles have different measures.

